









Half Past - Match It

I can use a clock to tell the time to half past the hour.



Draw a line to match the times to the correct clocks.



half past 9

half past 7

half past 2

half past 4

half past 6

half past 12









Half Past - Match It **Answers**

I can use a clock to tell the time to half past the hour.



Draw a line to match the times to the correct clocks.



half past 9

half past 7

half past 2

half past 4

half past 6

half past 12