



Compare objects within 50

I a) Draw counters to show the apples.



b) Draw counters to show the children.



c) Complete the sentences.


There are apples.

There are children.

There are fewer _____ than _____



d)



All the children can have one apple.

Is Teddy correct?



2 Draw counters to make the statements true.

a)

●	●	●	●	●
●	●	●	●	●

>

●	●	●	●	
●	●	●		

>

b)

>

●	●	●	●	●
●	●	●	●	●

>

●	●	●	●	●
●	●	●	●	

c)

●	●	●	●	●
●	●	●	●	●

^

●	●	●	●	●
●	●	●	●	●

=

●		●		
●			●	

d)

●	●	●		
	●	●	●	

Is there more than one answer for each?

