

Which Holds More?



Instructions

Click the object that you think
will be able to hold more inside it.

If correct, a **green** circle will appear.
If incorrect, a **red** circle will appear.

Capacity

Which holds more?



a) the mug



b) the tablespoon

Capacity

Which holds more?



a) the bowl



b) the bucket

Capacity

Which holds more?



a) the water bottle



b) the milk carton

Capacity

Which holds more?



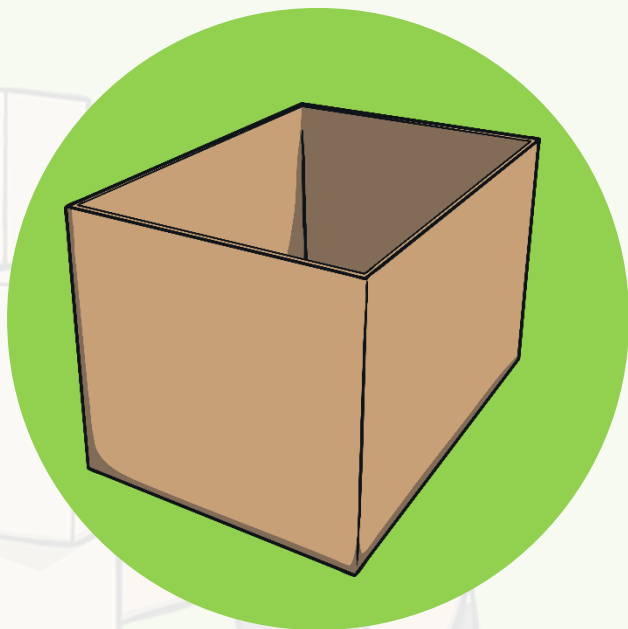
a) the kids pool



b) the plant pot

Capacity

Which holds more?



a) the box




b) the jar

Capacity

Which holds more?




a) the teacup



b) The fish bowl

Capacity

Which holds more?



a) the yoghurt tub



b) The cereal box

