


Divide by 5

1 Here are some counters.



a) Draw circles around groups of 5

b) Complete the sentences.

There are 30 counters.

There are counters in each group.

There are groups.

$$30 \div 5 = \square$$

$$\square \times 5 = 30$$



2 Share the sweets between the party bags.



There are sweets.

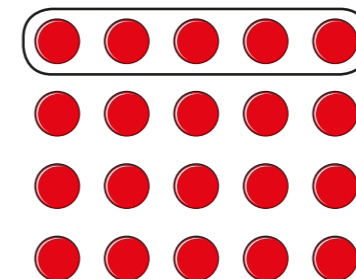
There are party bags.

There are sweets in each bag.

$$15 \div \square = \square$$

3 Complete the number sentences for each array.

a)




$$\square \times 5 = 20$$

$$20 \div 5 = \square$$



b)



$\square \times 5 = \square$
 $\square \div 5 = \square$

4 Draw an array to show that $10 \div 5 = 2$

5 A boat can fit 5 people.
Work out how many boats are needed for 45 people.

$$\square \div \square = \square$$

\square boats are needed.

6 Complete the divisions.

a) $15 \div 5 = \square$

b) $25 \div 5 = \square$

c) $50 \div 5 = \square$

d) $60 \div 5 = \square$

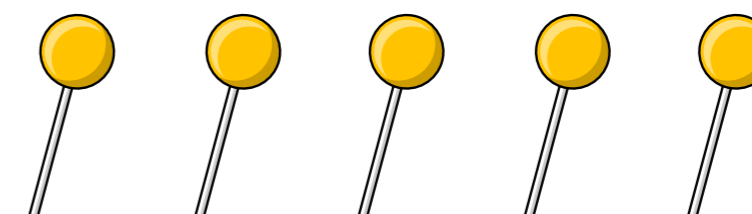
e) $\square \div 5 = 7$

f) $\square \div 5 = 11$

g) $\square \div 5 = 8$

h) $\square \div 5 = 0$

7 Annie buys 5 lollipops.



This costs her 50p.
How much do 2 lollipops cost?

 p
