

# Which Holds More?



## Instructions

Click the object that you think will be able to hold more inside it.

If correct, a **green** circle will appear.  
If incorrect, a **red** circle will appear.

# Capacity

## Which holds more?



a) the mug



b) the tablespoon

# Capacity

## Which holds more?



a) the bowl



b) the bucket

# Capacity

## Which holds more?



a) the water bottle



b) the milk carton

# Capacity

## Which holds more?



a) the kids pool

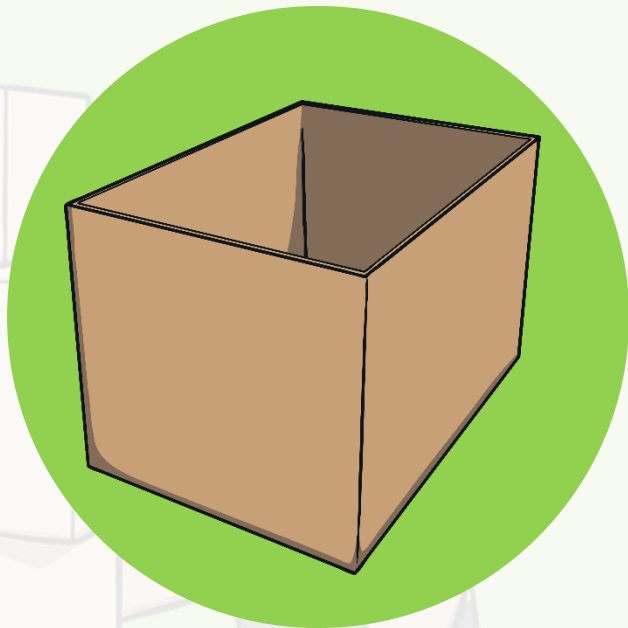


b) the plant pot



# Capacity

## Which holds more?



a) the box




b) the jar

# Capacity

## Which holds more?



a) the teacup




b) The fish bowl



# Capacity

## Which holds more?



a) the yoghurt tub



b) The cereal box

