

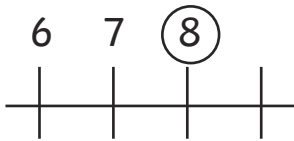
Finding One More Than

To find one more than a given number to 20.



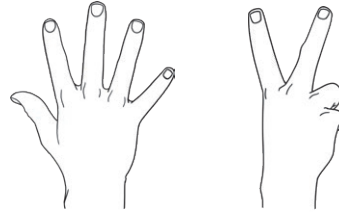
Complete these sentences.

1.



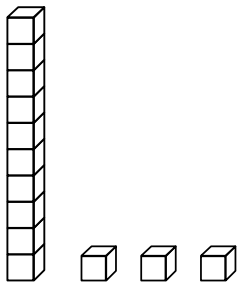
One more than is .

2.



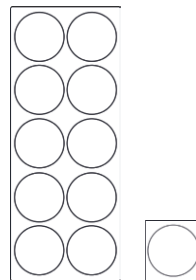
One more than is .

3.




One more than is .

4.



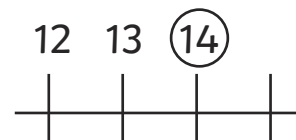
One more than is .

5.



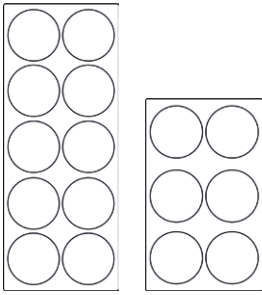
One more than is .

6.



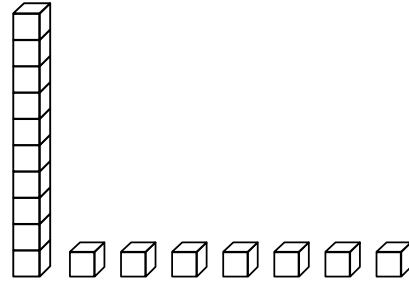
One more than is .

7.



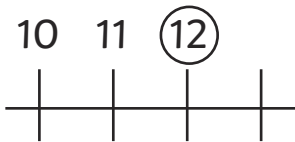
One more than is .

8.




One more than is .

9.



One more than is .

10.



One more than is .

Find different ways to show numbers up to 20.

Can your friend find one more?

Finding One More Than **Answers**

1. One more than 8 is 9.
2. One more than 7 is 8.
3. One more than 13 is 14.
4. One more than 11 is 12.
5. One more than 15 is 16.
6. One more than 14 is 15.
7. One more than 16 is 17.
8. One more than 17 is 18.
9. One more than 12 is 13.
10. One more than 19 is 20.

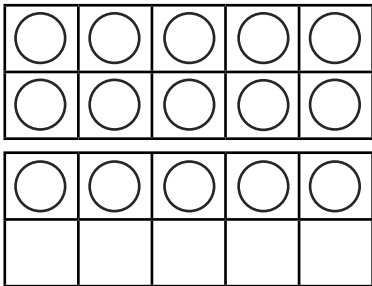
Finding One More Than

To find one more than a given number to 20.



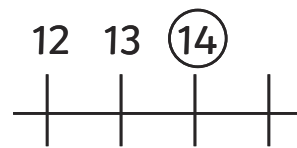
Complete these sentences.

1.



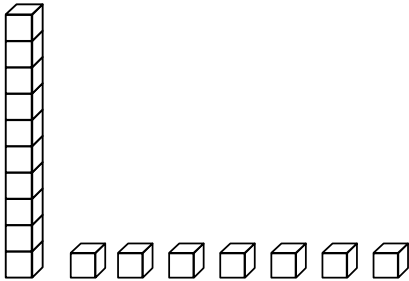
One more than is .

2.



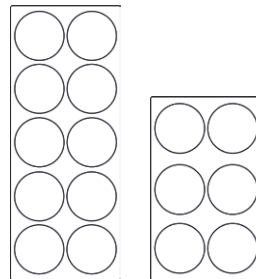
One more than is .

3.



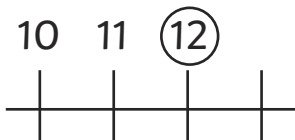
One more than is .

4.




One more than is .

5.



One more than is .

6.



One more than is .



Finish these sentences.

What will you use to help you find the answers?

7. One more than 10 is .

8. One more than 13 is .

9. One more than 11 is .

10. One more than 18 is .

Make 'one more' sentences with numbers to 20 for your friend to finish.

How can you check if they are correct?

Finding One More Than **Answers**

1. One more than 15 is 16.
2. One more than 14 is 15.
3. One more than 17 is 18.
4. One more than 16 is 17.
5. One more than 12 is 13.
6. One more than 19 is 20.
7. 11
8. 14
9. 12
10. 19