




# Bake Sale Subtraction within 10

I can subtract numbers within 10.


Pudsey Bear has baked lots of treats for a school bake sale to try and raise money for BBC Children in Need. They smell and look so delicious that he eats some. Calculate how many of each treat he has left.




# Bake Sale Subtraction within 10 Answers


I can subtract numbers within 10.


Pudsey Bear has baked lots of treats for a school bake sale to try and raise money for BBC Children in Need. They smell and look so delicious that he eats some. Calculate how many of each treat he has left.


$$4 - 1 = 3$$


$$3 - 2 = 1$$


$$5 - 3 = 2$$


$$6 - 2 = 4$$


$$8 - 3 = 5$$