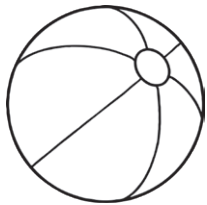


Seaside I Spy and Add to 20 Answers

Count the number of each type of seaside item needed in the addition number sentences. Write the numbers in the boxes to create and then solve the addition number sentences.



4

+



2

=

6



5

+



5

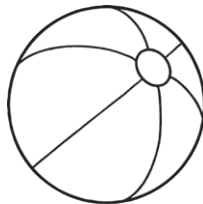
=

10



10

+



4

=

14



15


+



2

=

17



19

+



1

=

20