




Pirates I Spy and Add to 20

Count the number of each type of pirate item needed in the addition number sentence. Write the numbers in the boxes to create and then solve an addition number sentence.

 $\square +$  $= \square$

 $\square +$  $= \square$

 $\square +$  $= \square$

 $\square +$  $= \square$

 $\square +$  $= \square$